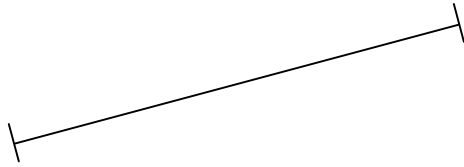
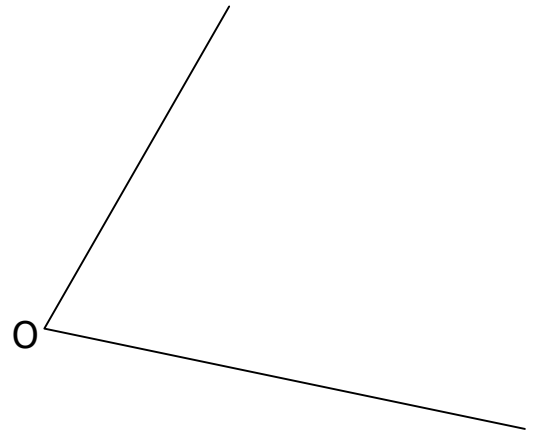


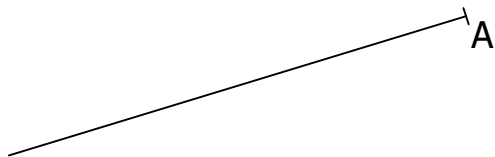
1) Traçar a mediatriz do seguimento de reta.



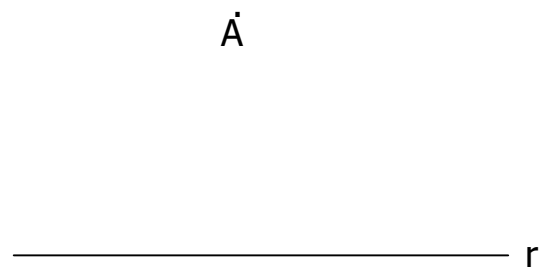
2) Traçar a bissetriz das semirretas de origem O.



3) Traçar uma perpendicular a partir do ponto A.



4) Traçar uma paralela a r que passe pelo ponto A.



IFSC		Diedro	
Professor		Data	
Desenhista		Unid.	mm
		Esc.	1:1